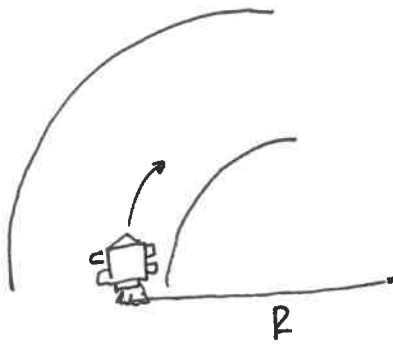


11

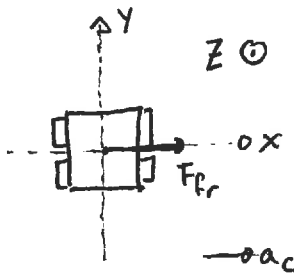


$$R = 100\text{m}$$

$$m = 2000\text{kg}$$

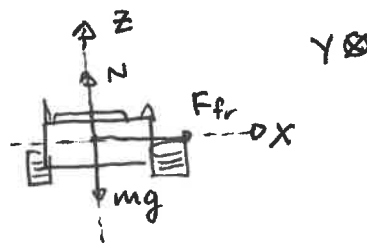
$$\mu_s = 0.9$$

Free body diagrams



$$\frac{x}{F_{fr} = m a_c \text{ --- (1) } \quad \frac{y}{N/A}$$

$$a_c = \frac{v^2}{R} \text{ --- (3)}$$



$$\frac{z}{N - mg = 0 \text{ --- (2)}}$$

$$F_{fr} = \mu_s N \text{ --- (4)}$$

(2), solve for N.

$$N = mg \text{ --- (2)'}$$

(1) & (2)', (4), (3), solve for v.

$$\mu_s N = m \frac{v^2}{R}$$

$$\mu_s mg = m \frac{v^2}{R}$$

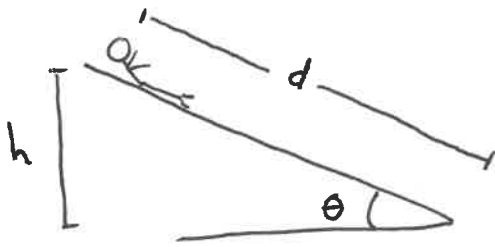
$$v^2 = R \mu_s g$$

$$v = \sqrt{\mu_s R g}$$

$$v = \sqrt{(0.9)(100)(10)}$$

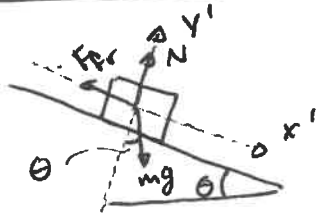
$$v = 30\text{m/s}$$

2



$V_0 = 0 \text{ m/s}$
 $m = 60 \text{ kg}$
 $\mu_k = 0.25$
 $d = 10 \text{ m}$
 $h = ?$

Free body diagram

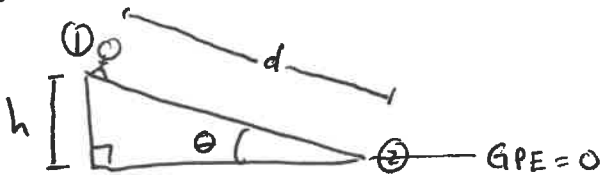


$\frac{x'}{mg \sin \theta} - F_{fr} = ma_x \quad \text{--- (1)}$

$\frac{y'}{N - mg \cos \theta} = 0 \quad \text{--- (2)}$

$F_{fr} = \mu_k N \quad \text{--- (3)}$

Energy Diagram



$\frac{h}{d} = \sin \theta$
 $h = d \sin \theta \quad \text{--- (5)}$

$\frac{E_1}{GPE + SPE + FE + KE} = \frac{E_2}{GPE + SPE + FE + KE}$

$mgh = \frac{1}{2}mv^2 + \mu_k N \cdot d \quad \text{--- (4)}$

(2), solve for N.

$N = mg \cos \theta \quad \text{--- (2)'}$

(4) - (2)', (5), solve for v.

$mgd \sin \theta = \frac{1}{2}mv^2 + \mu_k mg \cos \theta \cdot d$

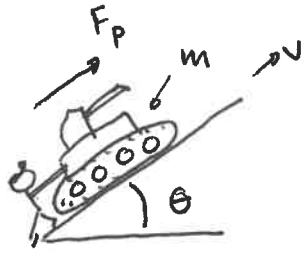
$\frac{1}{2}v^2 = gd (\sin \theta - \mu_k \cos \theta)$

$v = \sqrt{2gd (\sin \theta - \mu_k \cos \theta)}$

$v = \sqrt{2(10)(10)(\sin 30^\circ - 0.25 \cos 30^\circ)}$

$v = 7.53 \text{ m/s}$

3



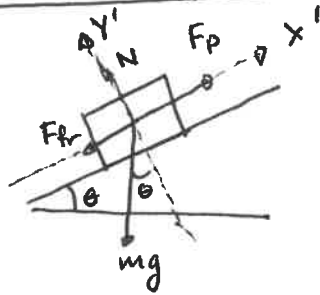
$$F_p = 60,000 \text{ N}$$

$$m = 5000 \text{ kg}$$

$$\theta = 30^\circ$$

$$v = 1 \text{ m/s}$$

Free Body Diagram



Constant velocity
means $a = 0$.

$$F_p - mg \sin \theta - F_{fr} = 0 \quad \text{--- (1)}$$

$$N - mg \cos \theta = 0 \quad \text{--- (2)}$$

$$F_{fr} = \mu_k N \quad \text{--- (3)}$$

(2), solve for N.

$$N = mg \cos \theta \quad \text{--- (2)'}$$

(1) - (2)', (3), solve for μ_k .

$$F_p - mg \sin \theta - \mu_k mg \cos \theta = 0$$

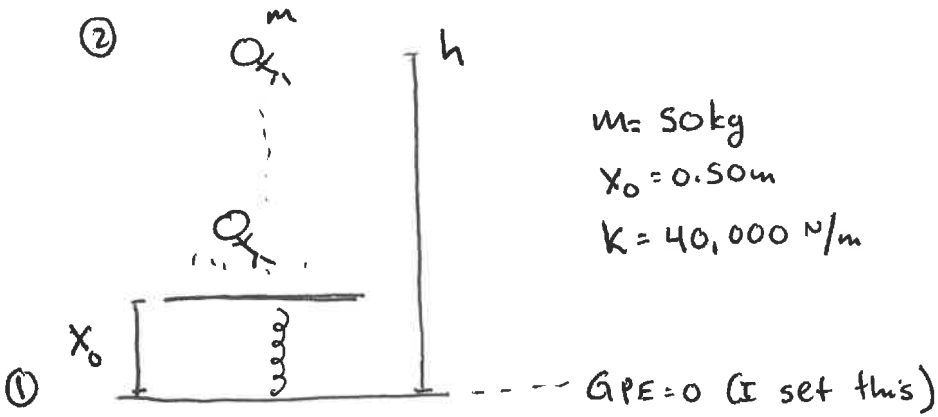
$$F_p - mg \sin \theta = \mu_k mg \cos \theta$$

$$\mu_k = \frac{F_p - mg \sin \theta}{mg \cos \theta}$$

$$\mu_k = \frac{60,000 - (5000)(10) \sin 30^\circ}{(5000)(10) \cos 30^\circ}$$

$$\boxed{\mu_k = 0.81} \quad \text{--- note: this is unitless.}$$

4



$$m = 50 \text{ kg}$$

$$x_0 = 0.50 \text{ m}$$

$$k = 40,000 \text{ N/m}$$

$$\frac{E_1}{GPE^{\circ} + SPE^{\circ} + KE^{\circ} + FE^{\circ}} = \frac{E_2}{GPE^{\circ} + SPE^{\circ} + KE^{\circ} + FE^{\circ}}$$

$$\frac{1}{2} k x_0^2 = mgh \quad \text{--- ①}$$

①, solve for h .

$$h = \frac{\frac{1}{2} k x_0^2}{mg} = \frac{k x_0^2}{2mg}$$

$$h = \frac{(40,000)(0.5)^2}{2(50)(10)}$$

$$h = 10 \text{ m}$$

5



$$\begin{aligned} m &= 80 \text{ kg} \\ h &= 5 \text{ m} \\ v_0 &= 30 \text{ m/s} \end{aligned}$$

$$\frac{E_0}{E_1} \quad \frac{E_2}{E_2}$$
$$GPE_0 + SPE_0 + KE_1 + FE_0 = GPE_2 + SPE_2 + KE_2 + FE_2$$

$$\frac{1}{2} m v_0^2 = mgh + \frac{1}{2} m v_f^2 \quad \text{--- (1)}$$

①, solve for v_f .

$$\frac{1}{2} v_0^2 = gh + \frac{1}{2} v_f^2$$


$$v_0^2 - 2gh = v_f^2$$

$$v_f = \sqrt{v_0^2 - 2gh}$$

$$v_f = \sqrt{(30)^2 - 2(10)(5)}$$

$$v_f = 28.3 \text{ m/s}$$

6



Cannot use conservation of energy.

Use conservation of momentum (collision)

$$\frac{X}{P_{ix} = P_{fx}}$$

$$\frac{Y}{P_{iy} = P_{fy}}$$

$$m_F V_{0F} + m_c V_{0c} = (m_F + m_c) V_{BF} \quad \text{---(1)}$$

①, solve for V_F .

$$V_{BF} = \frac{m_F V_{0F} + m_c V_{0c}}{m_F + m_c}$$

$$V_{BF} = \frac{(70)(50) + (80)(10)}{70 + 80}$$

$$V_{BF} = 28.7\text{m/s}$$